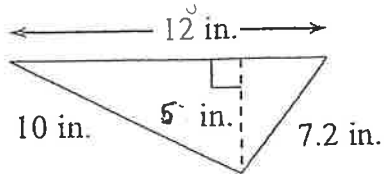


Name _____

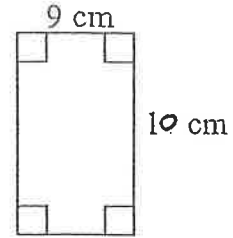
Date _____ Period _____

Find the area and perimeter of each shape. Circle your answers.

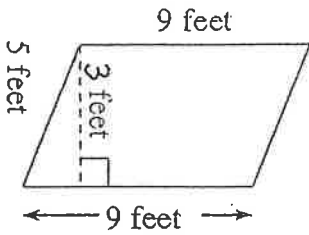
1)



2)



3)



4)

