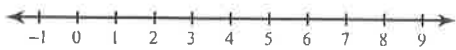
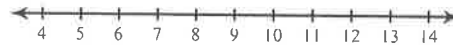


Solve each inequality and graph its solution.

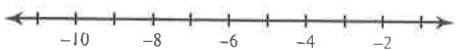
1) $-4m \geq -4$



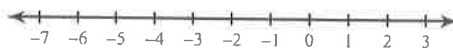
2) $\frac{n}{5} \leq 2$



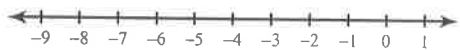
3) $-4r > 16$



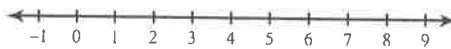
4) $\frac{n}{2} < 0$



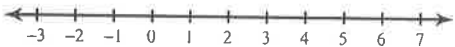
5) $\frac{x}{5} \leq -\frac{3}{5}$



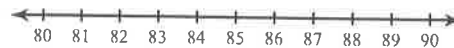
6) $\frac{x}{2} \geq 3$



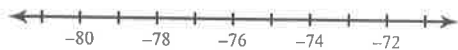
7) $14v \leq 14$



8) $\frac{b}{6} > 14$



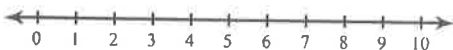
9) $\frac{a}{6} < -13$



10) $\frac{n}{3} \geq -6$



11) $-10x < -80$



12) $\frac{k}{13} \leq 6$

