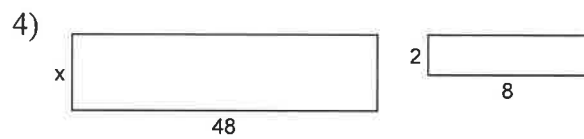
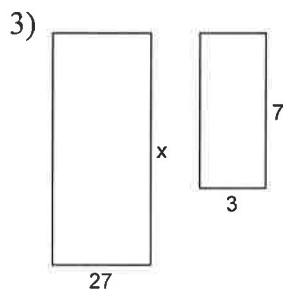
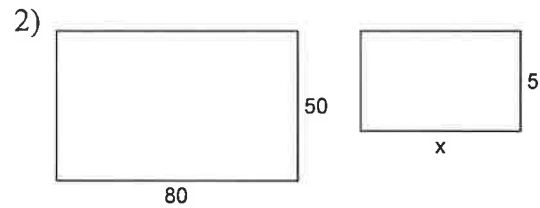
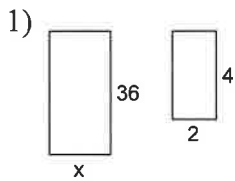


Assignment

Date _____ Period _____

Each pair of figures is similar. Find the missing side. HINT you could set up a proportion and cross multiply or you could try to identify the multiplier.



5) 7 apples cost \$4.55. What is the unit rate?