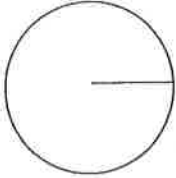
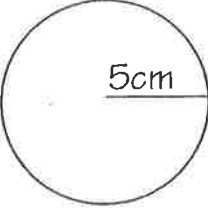
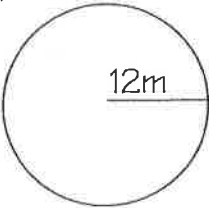
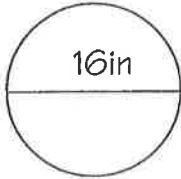
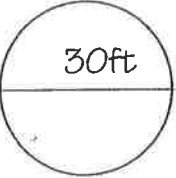
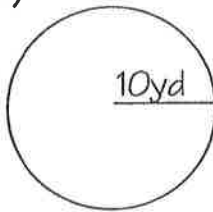
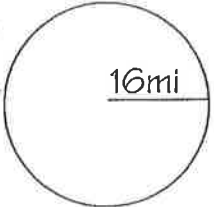
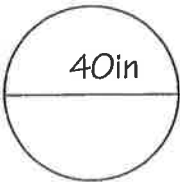


Name: _____

Circumference and Area of Circles

Find the area and circumference of each circle. Use $\pi = 3.14$. Show your calculations!!!

<p>Circle: $A =$</p> <p>$C =$</p>  <p>$r =$ $d =$</p>	<p>EX)</p>  <p>$A =$</p> <p>$C =$</p>
<p>1) $A =$</p>  <p>$C =$</p>	<p>2) $A =$</p>  <p>$C =$</p>
<p>3) $A =$</p>  <p>$C =$</p>	<p>4) $A =$</p>  <p>$C =$</p>
<p>5) $A =$</p>  <p>$C =$</p>	<p>6) $A =$</p>  <p>$C =$</p>